




Which number comes next?




2 | 4 | 6 | 8 | 10




3 | 6 | 9 | 12 | 15



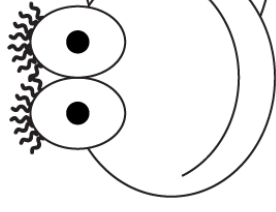
4 | 8 | 12 | 16 | 20



5 | 10 | 15 | 20 | 25



6 | 12 | 18 | 24 | 30



7 | 14 | 21 | 28 | 35